

# 都道府県の形4

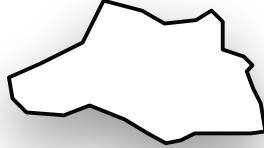
月 日

● 次の都道府県名を答えなさい。（縮尺は同一ではありません。）

①



②



③



④



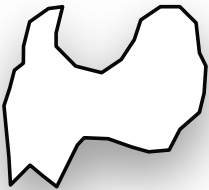
⑤



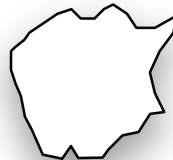
⑥



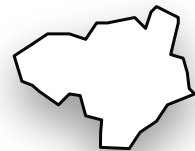
⑦



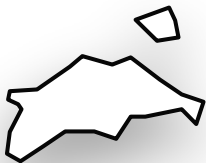
⑧



⑨



⑩



⑪



答え

①



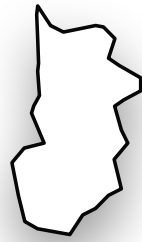
愛媛県

②



埼玉県

③



奈良県

④



宮崎県

⑤



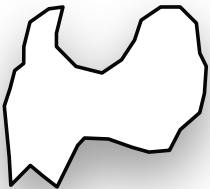
秋田県

⑥



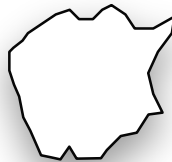
山形県

⑦



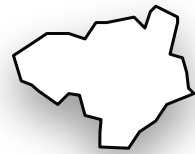
富山県

⑧



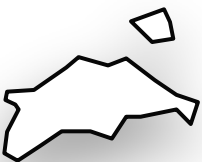
岡山県

⑨



徳島県

⑩



香川県

⑪



佐賀県